



UNIVERSIDAD NACIONAL DE COLOMBIA

VICERRECTORÍA ACADÉMICA
DIRECCIÓN NACIONAL DE ADMISIONES

DISEÑO DE PORTADA: CARLOS FERNANDO AGUIDO R. - ESCUELA DE DISEÑO GRÁFICO

Artes

Ciencias Sociales

Ciencias Básicas

Ingenierías

Ciencias de la Salud

Ciencias Agropecuarias

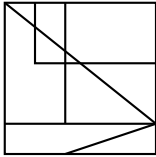
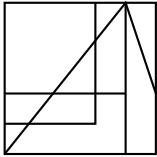
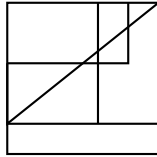
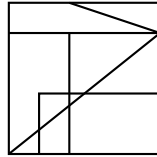
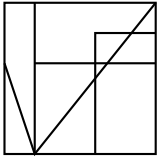
PRUEBA DE ADMISIÓN
PRIMER SEMESTRE DE 2010
PROGRAMAS DE PREGRADO

OCTUBRE 03 DE 2009

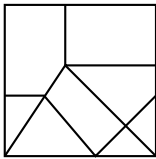
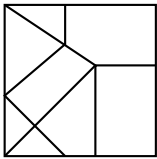
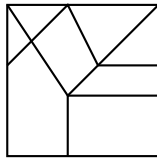
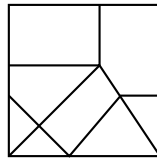
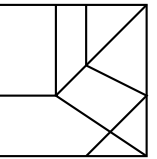
ANÁLISIS DE LA IMAGEN
Preguntas 1 a 15

En las preguntas 1 a 5 identifique la imagen que es igual al modelo de izquierda.

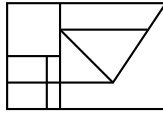
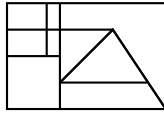
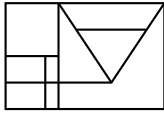
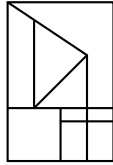
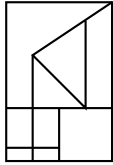
1. A. B. C. D.

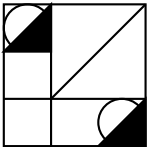
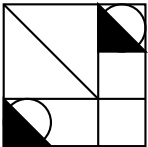
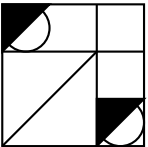
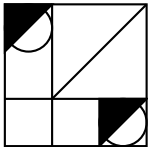
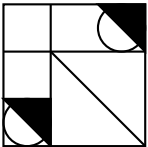
2. A. B. C. D.

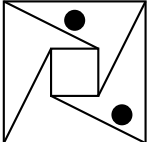
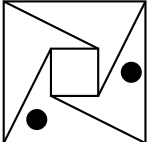
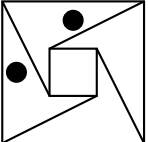
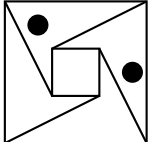
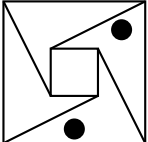
3. A. B. C. D.

4. A. B. C. D.

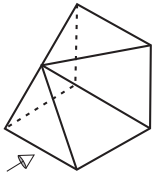






5. A. B. C. D.

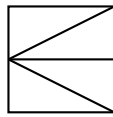






En las preguntas 6 a 10 identifique la vista del objeto de la izquierda en el sentido en que la flecha indica.

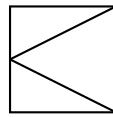
6.



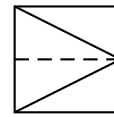
A.



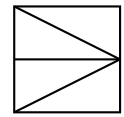
B.



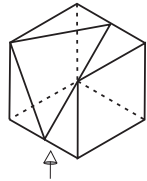
C.



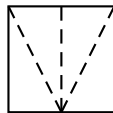
D.



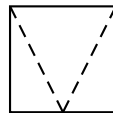
7.



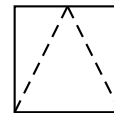
A.



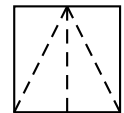
B.



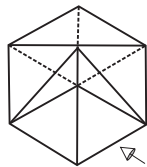
C.



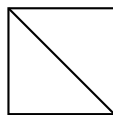
D.



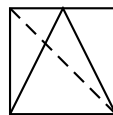
8.



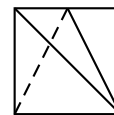
A.



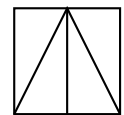
B.



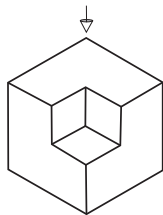
C.



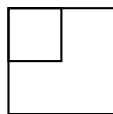
D.



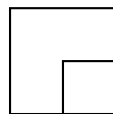
9.



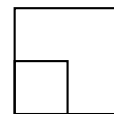
A.



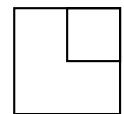
B.



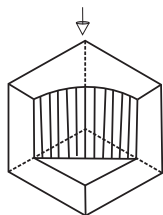
C.



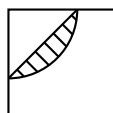
D.



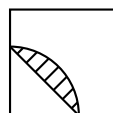
10.



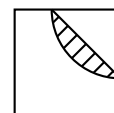
A.



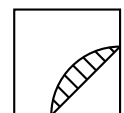
B.



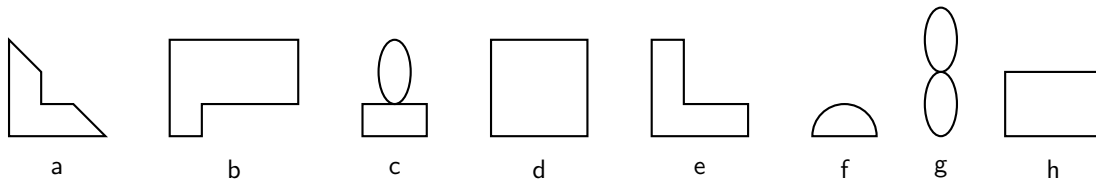
C.



D.




Dadas las siguientes figuras, con cuáles y cuántas es posible armar la imagen propuesta en las preguntas 11 a 13.



11.

- A. 1d - 2e - 1b - 2a
- B. 2a - 2h - 1e - 1d
- C. 2a - 1d - 2e - 1b
- D. 2h - 1d - 2b - 1e




12.

- A. 2f - 2e - 2d - 1c - 2a
- B. 1b - 1d - 4e - 1c - 2f
- C. 2e - 2a - 1d - 2f - 1c
- D. 2d - 1b - 1e - 2f

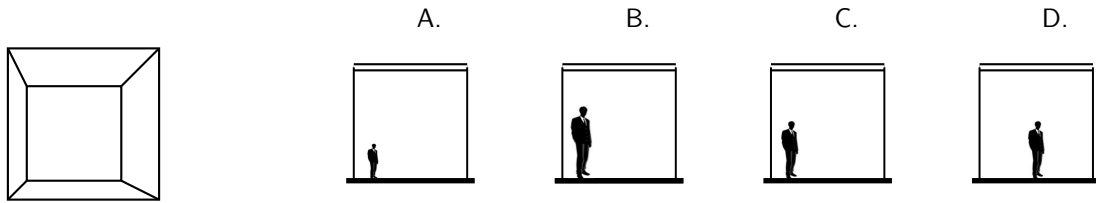


13.

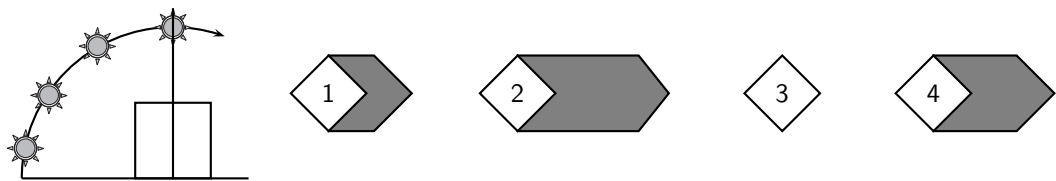
- A. 2a - 3c - 2d - 2e - 2f - 1g - 1h
- B. 2a - 2f - 2d - 4c - 2e - 1b
- C. 2a - 2c - 1d - 3e - 2f - 2g - 1h
- D. 2f - 3d - 3c - 1g - 2e



14. De acuerdo con la perspectiva de la izquierda, la posición y altura correcta de la persona es



15. En el dibujo de la izquierda se muestra una representación de la salida del Sol. A la Derecha se representan diferentes vistas, numeradas del 1 al 4, de la proyección de la sombra del Sol durante el recorrido ilustrado.



La secuencia correcta de la proyección de la sombra del Sol es

- A.
2 - 1 - 3 - 4
- B.
2 - 4 - 1 - 3
- C.
3 - 1 - 4 - 2
- D.
4 - 2 - 1 - 3

FIN